

# Electrotechnology

## Section II

35 marks

Attempt Questions 16–24


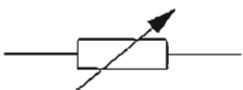

Allow about 45 minutes for this section

Answer the questions in the spaces provided.

---

### Question 16 (3 marks)

Identify the meaning of each symbol in the table.

	<i>Symbol</i>	<i>Meaning</i>	
(a)		fuse	1
(b)		potentiometer resistor	1
(c)		LED	1