

Electrotechnology

Section II

35 marks


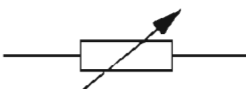
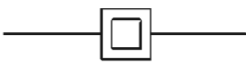
Attempt Questions 16–24

Allow about 45 minutes for this section

Answer the questions in the spaces provided.

Question 16 (3 marks)

Identify the meaning of each symbol in the table.

	<i>Symbol</i>	<i>Meaning</i>	
(a)		<i>battery</i>	1
(b)		<i>fuse</i>	1
(c)		<i>connector</i>	1