

--	--	--	--	--

Centre Number

Section II

--	--	--	--	--	--	--	--	--

Student Number

35 marks


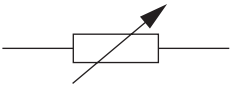

Attempt Questions 16–24

Allow about 45 minutes for this section

Answer the questions in the spaces provided.

Question 16 (3 marks)

Identify the meaning of each symbol in the table.

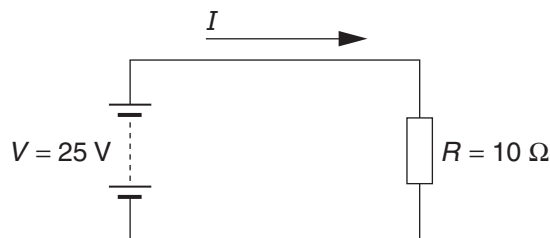
	<i>Symbol</i>	<i>Meaning</i>	
(a)			1
(b)			1
(c)			1

Question 17 (2 marks)

(a) Write an equation for Ohm's Law. **1**

.....

(b) Calculate the current in the electrical circuit shown. **1**



.....

.....