

# Geography

## Section II (continued)

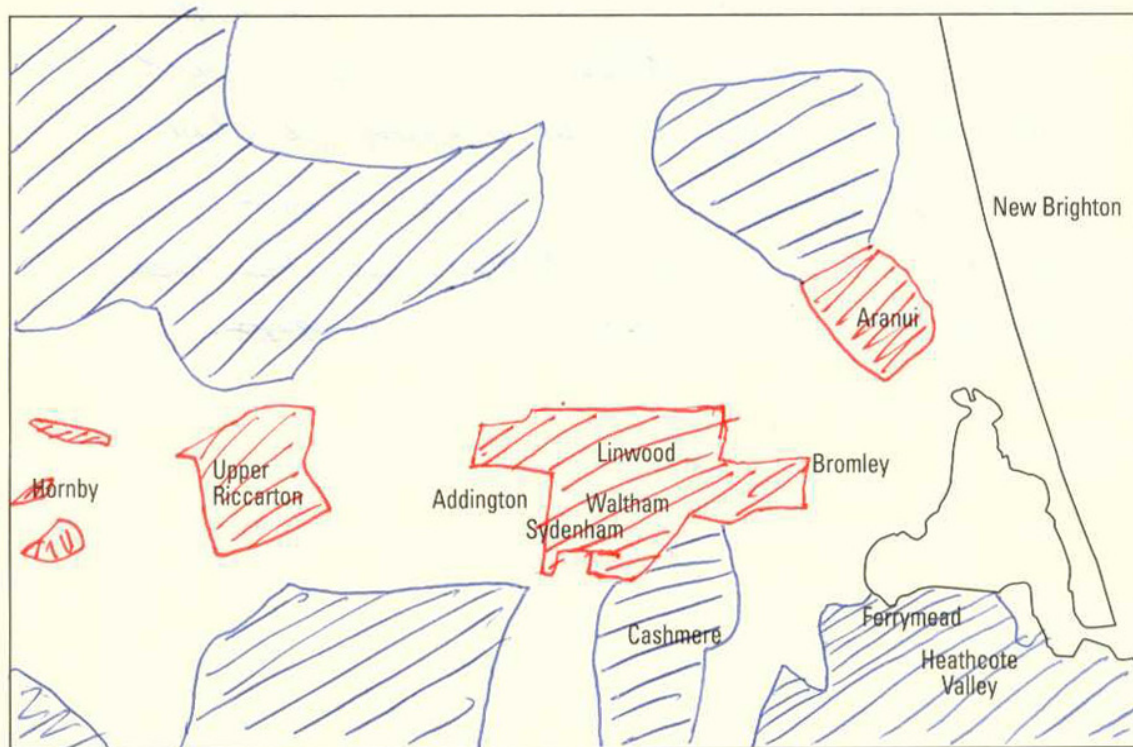
Marks

### Question 17 (9 marks)




(a) Refer to Source C.

Draw a simplified choropleth map to show the distribution of deprivation in Christchurch.

3



KEY

-  Most deprived
-  Mixed
-  Least deprived

Question 17 continues on page 14

## Question 17 (continued)

- (b) Refer to Sources C, D, F, H and I.

From these sources, name TWO locations within Christchurch that demonstrate different urban dynamics, and account for these differences.

6

In Linwood, there is urban decay happening as it is listed as most deprived in living conditions. This is due to tighter living space due to inner city area, low access to motor vehicles from less space and low income people living there. In Christchurch there is suburbanisation, as people move out of the city to the suburbs so there is more space live. More space means a bigger house, car, larger families, employed and larger income earned.

End of Question 17