

Geography

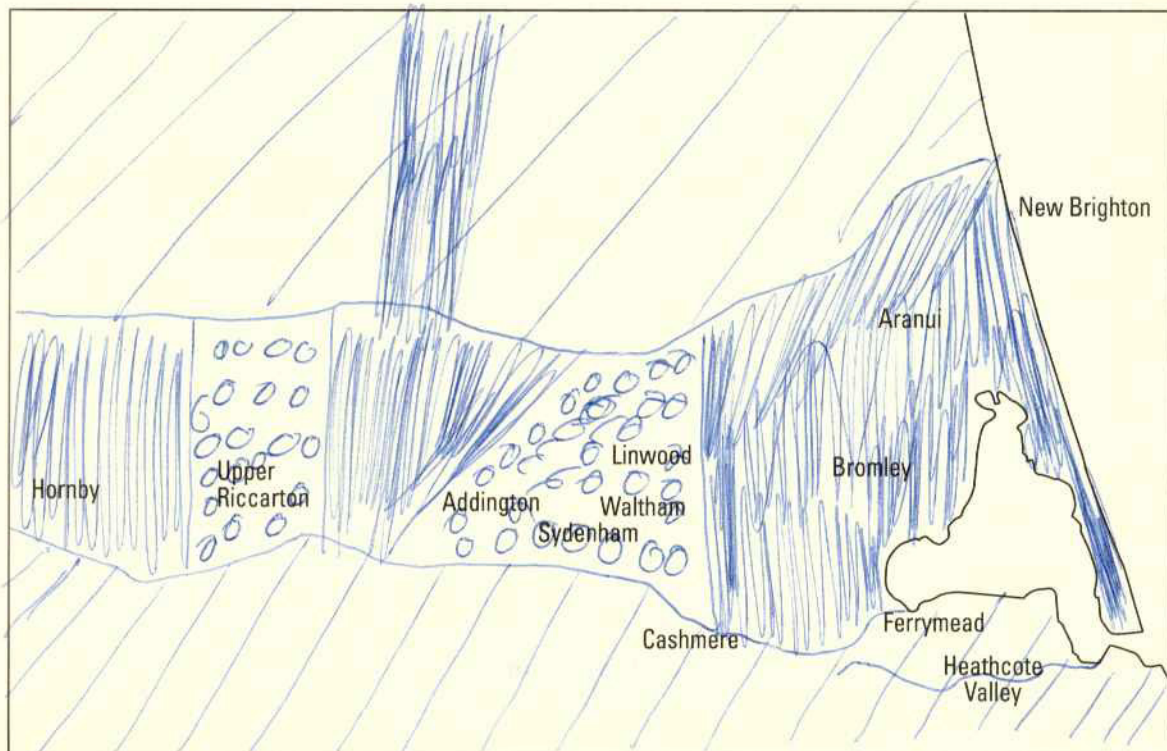
Section II (continued)

Marks




Question 17 (9 marks)

(a) Refer to Source C.

Draw a simplified choropleth map to show the distribution of deprivation in Christchurch. 3



KEY

-  Most deprived
-  Mixed
-  Least deprived

Question 17 continues on page 14

Question 17 (continued)

- (b) Refer to Sources C, D, F, H and I.

From these sources, name TWO locations within Christchurch that demonstrate different urban dynamics, and account for these differences.

6

Decentralisation is a urban dynamic that is evident, this is shown by the number of people who are not deprived living further away from the centre of Christchurch. Another urban dynamic present is Urban decay this is evident by the most deprived people living close to the centre of the city. The buildings here are probably old and run down.

End of Question 17