

--	--	--	--	--

Centre Number

Section II (continued)

--	--	--	--	--	--	--	--	--

Student Number

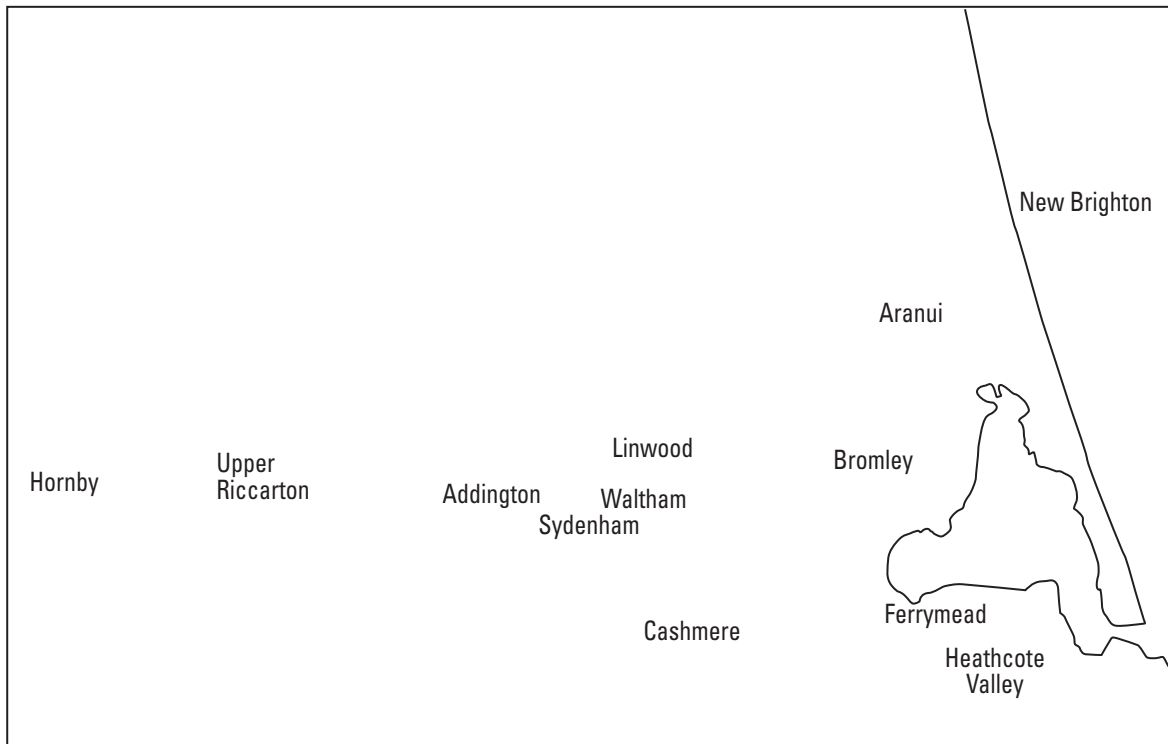
Marks

Question 17 (9 marks)

(a) Refer to Source C.

Draw a simplified choropleth map to show the distribution of deprivation in Christchurch.

3



KEY

- Most deprived
- Mixed
- Least deprived

Question 17 continues on page 14

Question 17 (continued)

- (b) Refer to Sources C, D, F, H and I.

From these sources, name TWO locations within Christchurch that demonstrate different urban dynamics, and account for these differences.

6

.....

.....

.....

.....

.....

.....

.....

.....

.....

.....

.....

.....

.....

.....

.....

.....

.....

.....

.....

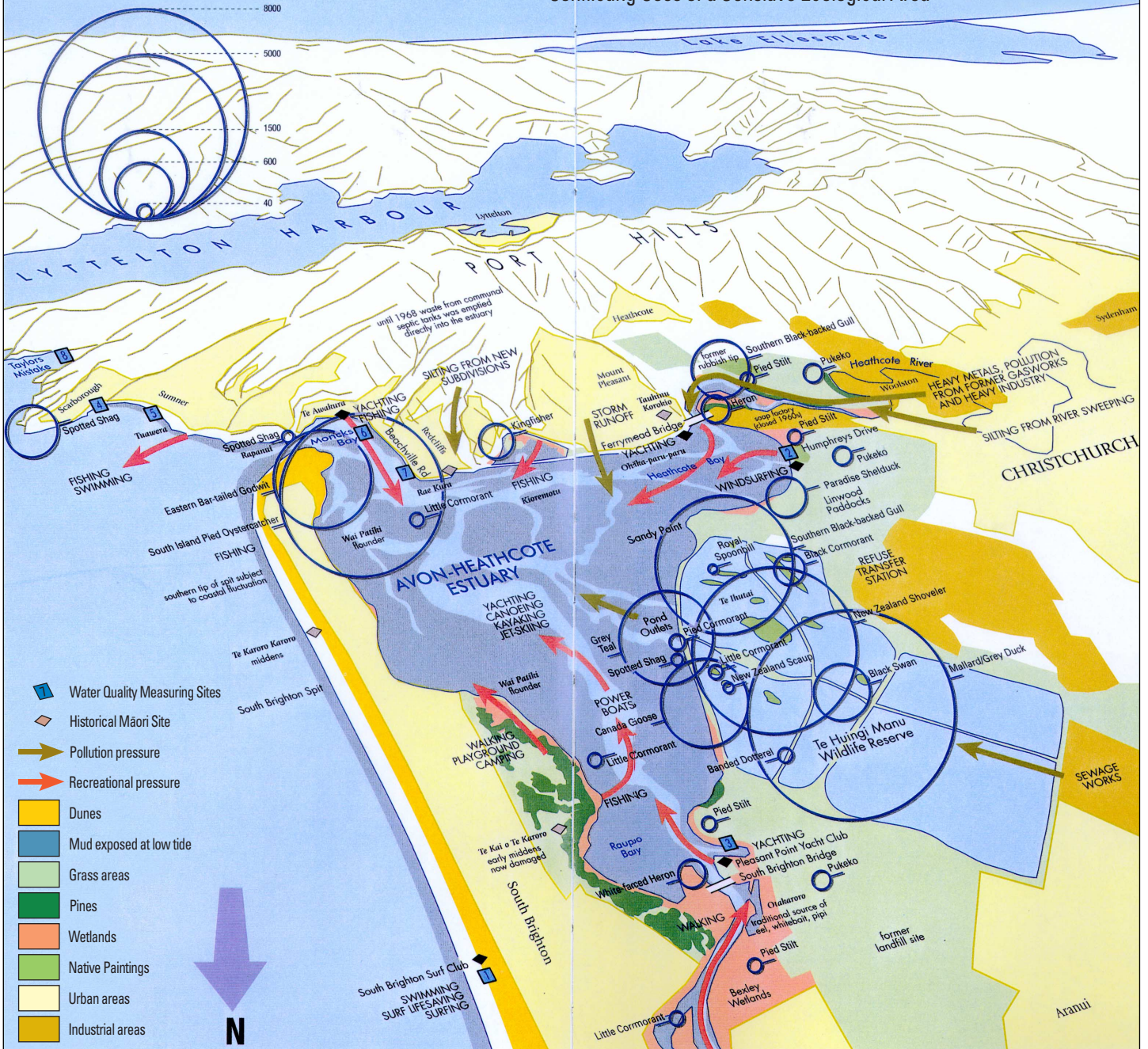
.....

End of Question 17

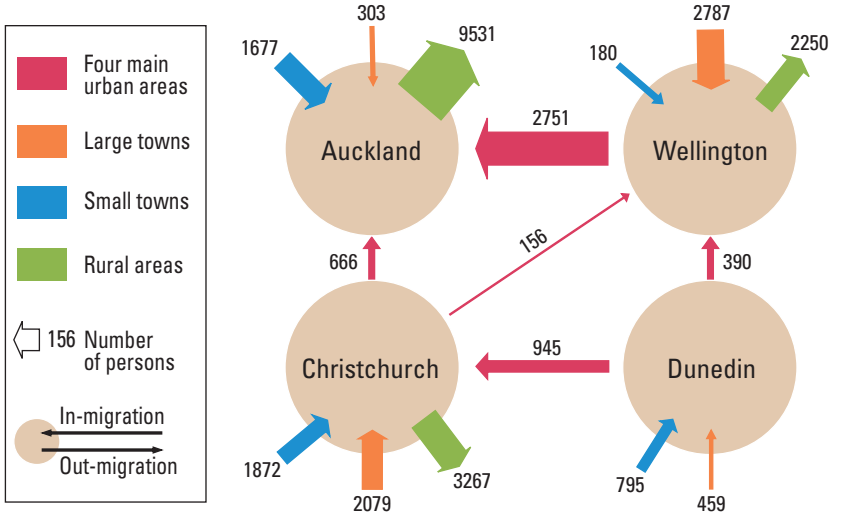
Source I — Resource Management of the Avon-Heathcote Estuary, 2000

Selected Bird Numbers January average
1987–1991 Roosting or nesting sites

The Avon-Heathcote Estuary:
Conflicting Uses of a Sensitive Ecological Area



Source J — Net Internal Migration: Four Main Urban Areas 1991–96



Source K — Sediment Core

