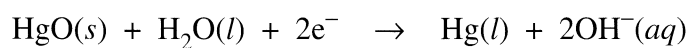
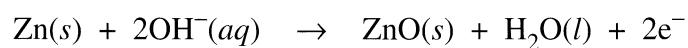
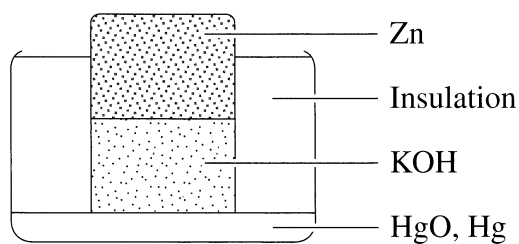


**Question 27** (2 marks)

The diagram shows a particular cell with relevant half equations.

2



Identify the anode, cathode and electrolyte for this cell.

*Zn is oxidised at anode*  
*HgO is reduced at cathode*  
*electrolyte is KOH.*